



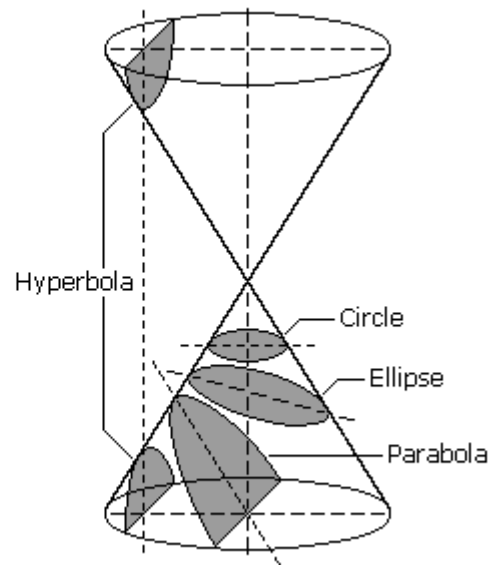
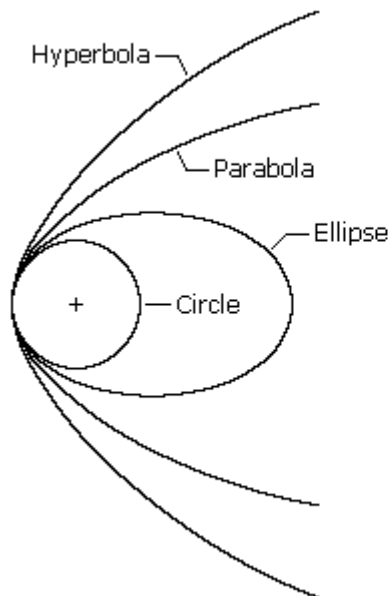
# ORBITAL MECHANICS

- [Conic Sections](#)
- [Orbital Elements](#)
- [Types of Orbits](#)
- [Newton's Laws of Motion and Universal Gravitation](#)
- [Uniform Circular Motion](#)
- [Motions of Planets and Satellites](#)
- [Launch of a Space Vehicle](#)
- [Position in an Elliptical Orbit](#)
- [Orbit Perturbations](#)
- [Orbit Maneuvers](#)
- [Escape Velocity](#)

*Orbital mechanics*, also called flight mechanics, is the study of the motions of artificial satellites and space vehicles moving under the influence of forces such as gravity, atmospheric drag, thrust, etc. Orbital mechanics is a modern offshoot of celestial mechanics which is the study of the motions of natural celestial bodies such as the moon and planets. The root of orbital mechanics can be traced back to the 17th century when mathematician Isaac Newton (1642-1727) put forward his laws of motion and formulated his law of universal gravitation. The engineering applications of orbital mechanics include ascent trajectories, reentry and landing, rendezvous computations, and lunar and interplanetary trajectories.

## Conic Sections

A *conic section*, or just *conic*, is a curve formed by passing a plane through a right circular cone. As shown in the figure to the right, the angular orientation of the plane relative to the cone determines whether the conic section is a *circle*, *ellipse*, *parabola*, or *hyperbola*. The circle and the ellipse arise when the intersection of cone and plane is a bounded curve. The circle is a special case of the ellipse in which the plane is perpendicular to the axis of the cone. If the plane is parallel to a generator line of the cone, the conic is called a parabola. Finally, if the intersection is an unbounded curve and the plane is not parallel to a generator line of the cone, the figure is a hyperbola. In the latter case the plane will intersect both halves of the cone, producing two separate curves.



We can define all conic sections in terms of the eccentricity. The type of conic section is also related to the semi-major axis and the energy. The table below

shows the relationships between eccentricity, semi-major axis, and energy and the type of conic section.

Conic Section	Eccentricity, $e$	Semi-major axis	Energy
Circle	0	= radius	$< 0$
Ellipse	$0 < e < 1$	$> 0$	$< 0$
Parabola	1	infinity	0
Hyperbola	$> 1$	$< 0$	$> 0$

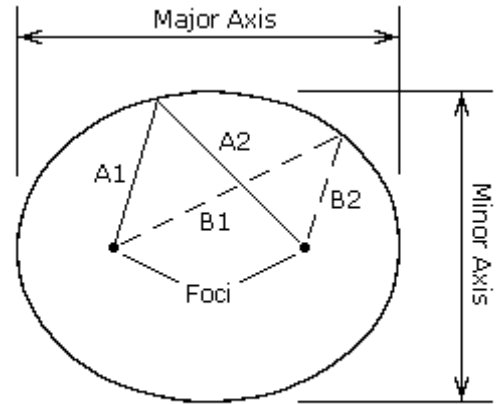
Satellite orbits can be any of the four conic sections. In this section we will discuss bounded conic orbits, i.e. circles and ellipses.

## Orbital Elements

To mathematically describe an orbit one must define six quantities, called *orbital elements*. They are

- Semi-Major Axis,  $a$
- Eccentricity,  $e$
- Inclination,  $i$
- Argument of Periapsis,  $\omega$
- Time of Periapsis Passage,  $T$
- Longitude of Ascending Node,  $\Omega$

An orbiting satellite follows an oval shaped path known as an ellipse with the body being orbited, called the primary, located at one of two points called foci. An ellipse is defined to be a curve with the following property: for each point on an ellipse, the sum of its distances from two fixed points, called foci, is constant (see figure to right). The longest and shortest lines that can be drawn through the center of an ellipse are called the major axis and minor axis, respectively. The *semi-major axis* is one-half of the major axis and represents a satellite's mean distance from its primary. *Eccentricity* is the distance between the foci divided by the length of the major axis and is a number between zero and one. An eccentricity of zero indicates a circle.

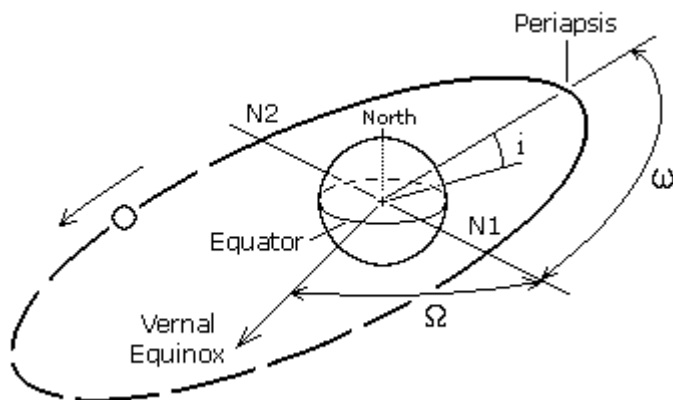


$$A1 + A2 = B1 + B2$$

*Inclination* is the angular distance between a satellite's orbital plane and the equator of its primary (or the ecliptic plane in the case of heliocentric, or sun centered, orbits). An inclination of zero degrees indicates an orbit about the primary's equator in the same direction as the primary's rotation, a direction called *prograde* (or direct). An inclination of 90 degrees indicates a polar orbit. An inclination of 180 degrees indicates a retrograde equatorial orbit. A *retrograde* orbit is one in which a satellite moves in a direction opposite to the rotation of its primary.

*Periapsis* is the point in an orbit closest to the primary. The opposite of periapsis, the farthest point in an orbit, is called *apoapsis*. Periapsis and apoapsis are usually modified to apply to the body being orbited, such as perihelion and aphelion for the Sun, perigee and apogee for Earth, perijove and apojuve for Jupiter, perilune and apolune for the Moon, etc. The *argument of periapsis* is the angular distance between the ascending node and the point of periapsis (see figure below). The *time of periapsis passage* is the time in which a satellite moves through its point of periapsis.

Nodes are the points where an orbit crosses a plane, such as a satellite crossing the Earth's equatorial plane. If the satellite crosses the plane going from south to north, the node is the *ascending node*; if moving from north to south, it is the *descending node*. The *longitude of the ascending node* is the node's celestial longitude. Celestial longitude is analogous to longitude on Earth and is measured in degrees counter-clockwise from zero with zero longitude being in the direction of the vernal equinox.



- $i$  = Inclination
- $\omega$  = Argument of Periapsis
- $\Omega$  = Longitude of Ascending Node
- N1 = Ascending Node
- N2 = Descending Node

In general, three observations of an object in orbit are required to calculate the six orbital elements. Two other quantities often used to describe orbits are period and true anomaly. *Period*,  $P$ , is the length of time required for a satellite to complete one orbit. *True anomaly*,  $v$ , is the angular distance of a point in an orbit past the point of periapsis, measured in degrees.

## Types Of Orbits

For a spacecraft to achieve Earth orbit, it must be launched to an elevation above the Earth's atmosphere and accelerated to orbital velocity. The most energy efficient orbit, that is one that requires the least amount of propellant, is a direct low

inclination orbit. To achieve such an orbit, a spacecraft is launched in an eastward direction from a site near the Earth's equator. The advantage being that the rotational speed of the Earth contributes to the spacecraft's final orbital speed. At the United States' launch site in Cape Canaveral (28.5 degrees north latitude) a due east launch results in a "free ride" of 1,471 km/h (914 mph). Launching a spacecraft in a direction other than east, or from a site far from the equator, results in an orbit of higher inclination. High inclination orbits are less able to take advantage of the initial speed provided by the Earth's rotation, thus the launch vehicle must provide a greater part, or all, of the energy required to attain orbital velocity. Although high inclination orbits are less energy efficient, they do have advantages over equatorial orbits for certain applications. Below we describe several types of orbits and the advantages of each:

**Geosynchronous orbits** (GEO) are circular orbits around the Earth having a period of 24 hours. A geosynchronous orbit with an inclination of zero degrees is called a *geostationary orbit*. A spacecraft in a geostationary orbit appears to hang motionless above one position on the Earth's equator. For this reason, they are ideal for some types of communication and meteorological satellites. A spacecraft in an inclined geosynchronous orbit will appear to follow a regular figure-8 pattern in the sky once every orbit. To attain geosynchronous orbit, a spacecraft is first launched into an elliptical orbit with an apogee of 35,786 km (22,236 miles) called a *geosynchronous transfer orbit* (GTO). The orbit is then circularized by firing the spacecraft's engine at apogee.

**Polar orbits** (PO) are orbits with an inclination of 90 degrees. Polar orbits are useful for satellites that carry out mapping and/or surveillance operations because as the planet rotates the spacecraft has access to virtually every point on the planet's surface.

**Walking orbits:** An orbiting satellite is subjected to a great many gravitational influences. First, planets are not perfectly spherical and they have slightly uneven mass distribution. These fluctuations have an effect on a spacecraft's trajectory. Also, the sun, moon, and planets contribute a gravitational influence on an orbiting satellite. With proper planning it is possible to design an orbit which takes advantage of these influences to induce a precession in the satellite's orbital plane. The resulting orbit is called a *walking orbit*, or *precessing orbit*.

**Sun synchronous orbits** (SSO) are walking orbits whose orbital plane precesses with the same period as the planet's solar orbit period. In such an orbit, a satellite crosses periapsis at about the same local time every orbit. This is useful if a satellite is carrying instruments which depend on a certain angle of solar illumination on the planet's surface. In order to maintain an exact synchronous timing, it may be necessary to conduct occasional propulsive maneuvers to adjust the orbit.

**Molniya orbits** are highly eccentric Earth orbits with periods of approximately 12 hours (2 revolutions per day). The orbital inclination is chosen so the rate of change of perigee is zero, thus both apogee and perigee can be maintained over fixed latitudes. This condition occurs at inclinations of 63.4 degrees and 116.6 degrees. For these orbits the argument of perigee is typically placed in the southern hemisphere, so the satellite remains above the northern hemisphere near apogee for approximately 11 hours per orbit. This orientation can provide good ground coverage at high northern latitudes.

**Hohmann transfer orbits** are interplanetary trajectories whose advantage is that they consume the least possible amount of propellant. A Hohmann transfer orbit to an outer planet, such as Mars, is achieved by launching a spacecraft and accelerating it in the direction of Earth's revolution around the sun until it breaks free of the Earth's gravity and reaches a velocity which places it in a sun orbit with an aphelion equal to the orbit of the outer planet. Upon reaching its destination, the spacecraft must decelerate so that the planet's gravity can capture it into a planetary orbit.

To send a spacecraft to an inner planet, such as Venus, the spacecraft is launched and accelerated in the direction opposite of Earth's revolution around the sun (i.e. decelerated) until it achieves a sun orbit with a perihelion equal to the orbit of the inner planet. It should be noted that the spacecraft continues to move in the same direction as Earth, only more slowly.

To reach a planet requires that the spacecraft be inserted into an interplanetary trajectory at the correct time so that the spacecraft arrives at the planet's orbit when the planet will be at the point where the spacecraft will intercept it. This task is comparable to a quarterback "leading" his receiver so that the football and receiver arrive at the same point at the same time. The interval of time in which a spacecraft must be launched in order to complete its mission is called a *launch window*.

## Newton's Laws of Motion and Universal Gravitation

*Newton's laws of motion* describe the relationship between the motion of a particle and the forces acting on it.

The first law states that if no forces are acting, a body at rest will remain at rest, and a body in motion will remain in motion in a straight line. Thus, if no forces are acting, the velocity (both magnitude and direction) will remain constant.

The second law tells us that if a force is applied there will be a change in velocity, i.e. an acceleration, proportional to the magnitude of the force and in the direction in which the force is applied. This law may be summarized by the equation

$$(3.1) \quad F = ma$$

where  $F$  is the force,  $m$  is the mass of the particle, and  $a$  is the acceleration.

The third law states that if body 1 exerts a force on body 2, then body 2 will exert a force of equal strength, but opposite in direction, on body 1. This law is commonly stated, "for every action there is an equal and opposite reaction".

In his *law of universal gravitation*, Newton states that two particles having masses  $m_1$  and  $m_2$  and separated by a distance  $r$  are attracted to each other with equal and opposite forces directed along the line joining the particles. The common

magnitude  $F$  of the two forces is

$$(3.2) \quad F = G \left( \frac{m_1 m_2}{r^2} \right)$$

where  $G$  is an universal constant, called the *constant of gravitation*, and has the value  $6.67259 \times 10^{-11} \text{ N}\cdot\text{m}^2/\text{kg}^2$  ( $3.4389 \times 10^{-8} \text{ lb}\cdot\text{ft}^2/\text{slug}^2$ ).

Let's now look at the force that the Earth exerts on an object. If the object has a mass  $m$ , and the Earth has mass  $M$ , and the object's distance from the center of the Earth is  $r$ , then the force that the Earth exerts on the object is  $GmM/r^2$ . If we drop the object, the Earth's gravity will cause it to accelerate toward the center of the Earth. By Newton's second law ( $F = ma$ ), this acceleration  $g$  must equal  $(GmM/r^2)/m$ , or

$$(3.3) \quad g = \frac{GM}{r^2}$$

At the surface of the Earth this acceleration has the value  $9.80665 \text{ m/s}^2$  ( $32.174 \text{ ft/s}^2$ ).

Many of the upcoming computations will be somewhat simplified if we express the product  $GM$  as a constant, which for Earth has the value  $3.986005 \times 10^{14} \text{ m}^3/\text{s}^2$  ( $1.408 \times 10^{16} \text{ ft}^3/\text{s}^2$ ). The product  $GM$  is often represented by the Greek letter  $\mu$ .

For additional useful constants please see the appendix [Basic Constants](#).

For a refresher on SI versus U.S. units see the appendix [Weights & Measures](#).

## Uniform Circular Motion

In the simple case of free fall, a particle accelerates toward the center of the Earth while moving in a straight line. The velocity of the particle changes in magnitude, but not in direction. In the case of uniform circular motion a particle moves in a circle with constant speed. The velocity of the particle changes continuously in direction, but not in magnitude. From Newton's laws we see that since the direction of the velocity is changing, there is an acceleration. This acceleration, called *centripetal acceleration* is directed inward toward the center of the circle and is given by

$$(3.4) \quad a = \frac{v^2}{r}$$

where  $v$  is the speed of the particle and  $r$  is the radius of the circle. Every accelerating particle must have a force acting on it, defined by Newton's second law ( $F = ma$ ). Thus, a particle undergoing uniform circular motion is under the influence of a force, called *centripetal force*, whose magnitude is given by

$$(3.5) \quad F = \frac{mv^2}{r}$$

The direction of  $F$  at any instant must be in the direction of  $a$  at the same instant, that is radially inward.

A satellite in orbit is acted on only by the forces of gravity. The inward acceleration which causes the satellite to move in a circular orbit is the gravitational acceleration caused by the body around which the satellite orbits. Hence, the satellite's centripetal acceleration is  $g$ , that is  $g = v^2/r$ . From Newton's law of universal gravitation we know that  $g = GM/r^2$ . Therefore, by setting these equations equal to one another we find that, for a circular orbit,

$$(3.6) \quad \frac{v^2}{r} = \frac{GM}{r^2}, \text{ or}$$
$$v = \sqrt{\frac{GM}{r}}$$

[Click here](#) for example problem #3.1  
(use your browser's "back" function to return)

## Motions of Planets and Satellites

Through a lifelong study of the motions of bodies in the solar system, Johannes Kepler (1571-1630) was able to derive three basic laws known as *Kepler's laws of planetary motion*. Using the data compiled by his mentor Tycho Brahe (1546-1601), Kepler found the following regularities after years of laborious calculations:

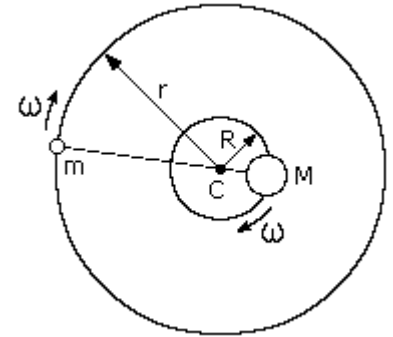
1. All planets move in elliptical orbits with the sun at one focus.
2. A line joining any planet to the sun sweeps out equal areas in equal times.
3. The square of the period of any planet about the sun is proportional to the cube of the planet's mean distance from the

sun.

These laws can be deduced from Newton's laws of motion and law of universal gravitation. Indeed, Newton used Kepler's work as basic information in the formulation of his gravitational theory.

As Kepler pointed out, all planets move in elliptical orbits, however, we can learn much about planetary motion by considering the special case of circular orbits. We shall neglect the forces between planets, considering only a planet's interaction with the sun. These considerations apply equally well to the motion of a satellite about a planet.

Let's examine the case of two bodies of masses  $M$  and  $m$  moving in circular orbits under the influence of each other's gravitational attraction. The center of mass of this system of two bodies lies along the line joining them at a point  $C$  such that  $mr = MR$ . The large body of mass  $M$  moves in an orbit of constant radius  $R$  and the small body of mass  $m$  in an orbit of constant radius  $r$ , both having the same angular velocity  $\omega$ . For this to happen, the gravitational force acting on each body must provide the necessary centripetal acceleration. Since these gravitational forces are a simple action-reaction pair, the centripetal forces must be equal but opposite in direction. That is,  $m\omega^2 r$  must equal  $M\omega^2 R$ . The specific requirement, then, is that the gravitational force acting on either body must equal the centripetal force needed to keep it moving in its circular orbit, that is



$$(3.7) \quad \frac{GMm}{(R+r)^2} = m\omega^2 r$$

If one body has a much greater mass than the other, as is the case of the sun and a planet or the Earth and a satellite, its distance from the center of mass is much smaller than that of the other body. If we assume that  $m$  is negligible compared to  $M$ , then  $R$  is negligible compared to  $r$ . Thus, equation (3.7) then becomes

$$(3.8) \quad GM = \omega^2 r^3$$

If we express the angular velocity in terms of the period of revolution,  $\omega = 2\pi/P$ , we obtain

$$(3.9) \quad GM = \frac{4\pi^2 r^3}{P^2}, \quad \text{or} \quad P^2 = \frac{4\pi^2 r^3}{GM}$$

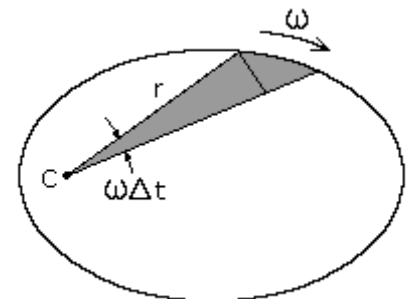
where  $P$  is the period of revolution. This is a basic equation of planetary and satellite motion. It also holds for elliptical orbits if we define  $r$  to be the semi-major axis ( $a$ ) of the orbit.

A significant consequence of this equation is that it predicts Kepler's third law of planetary motion, that is  $P^2 \sim r^3$ .

[Click here](#) for example problem #3.2  
[Click here](#) for example problem #3.3

Kepler's second law of planetary motion must, of course, hold true for circular orbits. In such orbits both  $\omega$  and  $r$  are constant so that equal areas are swept out in equal times by the line joining a planet and the sun. For elliptical orbits, however, both  $\omega$  and  $r$  will vary with time. Let's now consider this case.

The figure at right shows a particle revolving around  $C$  along some arbitrary path. The area swept out by the radius vector in a short time interval  $\Delta t$  is shown shaded. This area, neglecting the small triangular region at the end, is one-half the base times the height or approximately  $r(r\omega\Delta t)/2$ . This expression becomes more exact as  $\Delta t$  approaches zero, i.e. the small triangle goes to zero more rapidly than the large one. The rate at which area is being swept out instantaneously is therefore



$$(3.10) \quad \lim_{\Delta t \rightarrow 0} \left[ \frac{r(r\omega\Delta t)}{2} \right] = \frac{\omega r^2}{2}$$

For any given body moving under the influence of a central force, the value  $\omega r^2$  is constant.

Let's now consider two points  $P1$  and  $P2$  in an orbit with radii  $r1$  and  $r2$ , and velocities  $v1$  and  $v2$ . Since the velocity is always tangent to the path, it can be seen that if  $\phi$  is the angle between  $r$  and  $v$ , then

$$(3.11) \quad v \sin \phi = \omega r$$

where  $v \sin \phi$  is the transverse component of  $v$ . Multiplying through by  $r$ , we have

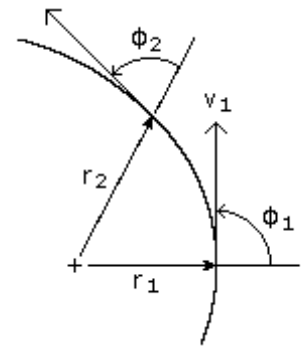
$$(3.12) \quad r v \sin \phi = \omega r^2 = \text{Constant}$$

or, for two points  $P1$  and  $P2$  on the orbital path

$$(3.13) \quad r_1 v_1 \sin \phi_1 = r_2 v_2 \sin \phi_2$$

Note that at periapsis and apoapsis,  $\phi = 90$  degrees. Thus, letting  $P1$  and  $P2$  be these two points we get

$$(3.14) \quad R_p v_p = R_a v_a$$



Let's now look at the energy of the above particle at points  $P1$  and  $P2$ . *Conservation of energy* states that the sum of the kinetic energy and the potential energy of a particle remains constant. The kinetic energy  $T$  of a particle is given by  $mv^2/2$  while the potential energy of gravity  $V$  is calculated by the equation  $-GMm/r$ . Applying conservation of energy we have

$$T_1 + V_1 = T_2 + V_2, \text{ or}$$

$$\frac{m v_1^2}{2} - \frac{GMm}{r_1} = \frac{m v_2^2}{2} - \frac{GMm}{r_2}, \text{ or}$$

$$(3.15) \quad v_2^2 - v_1^2 = 2GM \left( \frac{1}{r_2} - \frac{1}{r_1} \right)$$

From equations (3.14) and (3.15) we obtain

$$(3.16) \quad v_p = \sqrt{\frac{2GM R_a}{R_p(R_a + R_p)}}, \text{ and}$$

$$(3.17) \quad v_a = \sqrt{\frac{2GM R_p}{R_a(R_a + R_p)}}$$

Rearranging terms we get

$$(3.18) \quad R_a = \frac{R_p}{\left( \frac{2GM}{R_p v_p^2} - 1 \right)}, \text{ and}$$

$$(3.19) \quad R_p = \frac{R_a}{\left( \frac{2GM}{R_a v_a^2} - 1 \right)}$$

[Click here](#) for example problem #3.4

[Click here](#) for example problem #3.5

The eccentricity  $e$  of an orbit is given by

$$(3.20) \quad e = \frac{R_p v_p^2}{GM} - 1$$

[Click here](#) for example problem #3.6

If the semi-major axis  $a$  and the eccentricity  $e$  of an orbit are known, then the periapsis and apoapsis distances can be calculated by

$$(3.21) \quad R_p = a(1 - e), \text{ and}$$

$$(3.22) \quad R_a = a(1 + e)$$

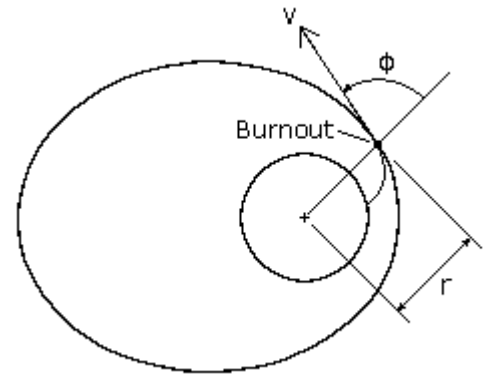
also note,  $R_p + R_a = 2a$

[Click here](#) for example problem #3.7

## Launch of a Space Vehicle

The launch of a satellite or space vehicle consists of a period of powered flight during which the vehicle is lifted above the Earth's atmosphere and accelerated to orbital velocity by a rocket, or launch vehicle. Powered flight concludes at burnout of the rocket's last stage at which time the vehicle begins its free flight. During free flight the space vehicle is assumed to be subjected only to the gravitational pull of the Earth. If the vehicle moves far from the Earth, its trajectory may be affected by the gravitational influence of the sun, moon, or another planet.

A space vehicle's orbit may be determined from the position and the velocity of the vehicle at the beginning of its free flight. A vehicle's position and velocity can be described by the variables  $r$ ,  $v$ , and  $\phi$ , where  $r$  is the vehicle's distance from the center of the Earth,  $v$  is its velocity, and  $\phi$  is the angle between the position vector and the velocity vector (see figure to right). If we let  $r_1$ ,  $v_1$ , and  $\phi_1$  be the initial (launch) values of  $r$ ,  $v$ , and  $\phi$ , then we may consider these as given quantities. If we let point  $P_2$  represent the perigee, then equation (3.13) becomes



$$(3.23) \quad v_2 = V_p = \frac{r_1 v_1 \sin \phi_1}{R_p}$$

Substituting equation (3.23) into (3.15), we can obtain an equation for the perigee radius  $R_p$ .

$$(3.24) \quad \frac{r_1^2 v_1^2 \sin^2 \phi_1}{R_p^2} - v_1^2 = 2GM \left( \frac{1}{R_p} - \frac{1}{r_1} \right)$$

Multiplying through by  $-R_p^2/(r_1^2 v_1^2)$  and rearranging, we get

$$(3.25) \quad \left( \frac{R_p}{r_1} \right)^2 (1-C) + \left( \frac{R_p}{r_1} \right) C - \sin^2 \phi_1 = 0$$

$$\text{where } C = \frac{2GM}{r_1 v_1^2}$$

Note that this is a simple quadratic equation in the ratio  $(R_p/r_1)$  and that  $2GM/(r_1 \times v_1^2)$  is a nondimensional parameter of the orbit.

Solving for  $(R_p/r_1)$  gives

$$(3.26) \quad \left( \frac{R_p}{r_1} \right)_{1,2} = \frac{-C \pm \sqrt{C^2 - 4(1-C)(-\sin^2 \phi_1)}}{2(1-C)}$$

Like any quadratic, the above equation yields two answers. The smaller of the two answers corresponds to  $R_p$ , the periapsis radius. The other root corresponds to the apoapsis radius,  $R_a$ .

Please note that in practice spacecraft launches are usually terminated at either perigee or apogee, i.e.  $\phi = 90$ . This condition results in the minimum use of fuel.

[Click here](#) for example problem #3.8

Equation (3.26) gives the values of  $R_p$  and  $R_a$  from which the eccentricity of the orbit can be calculated, however, it may be simpler to calculate the eccentricity  $e$  directly from the equation

$$(3.27) \quad e = \sqrt{\left( \frac{r_1 v_1^2}{GM} - 1 \right)^2 \sin^2 \phi_1 + \cos^2 \phi_1}$$

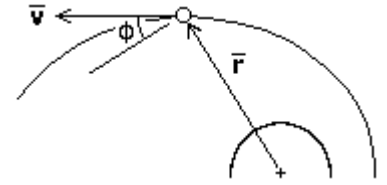
[Click here](#) for example problem #3.9

To pin down a satellite's orbit in space, we need to know the angle  $\bar{A}$  from the periapsis point to the launch point. This angle is given by

$$(3.28) \quad \tan\theta = \frac{\left(\frac{r_1 v_1^2}{GM}\right) \sin\phi_1 \cos\phi_1}{\left(\frac{r_1 v_1^2}{GM}\right) \sin^2\phi_1 - 1}$$

[Click here](#) for example problem #3.10

Often  $\phi$  is expressed not as the angle between the position and velocity vectors as shown above, but rather, as the angle between the velocity vector and a line perpendicular to the position vector as illustrated in the figure to the right. This angle is called the *flight-path angle*, and is positive when  $v$  is directed away from the primary as shown. When  $\phi$  is measured in this manner, we must replace  $\phi$  in equations (3.23) through (3.28) above with  $90-\phi$ .



## Position in an Elliptical Orbit

Johannes Kepler was able to solve the problem of relating position in an orbit to the elapsed time,  $t-t_0$ , or conversely, how long it takes to go from one point in an orbit to another. To solve this, Kepler introduced the quantity  $M$ , called the *mean anomaly*, which is the fraction of an orbit period that has elapsed since perigee. The mean anomaly equals the true anomaly for a circular orbit. By definition,

$$(3.29) \quad M - M_0 = n(t - t_0)$$

where  $M_0$  is the mean anomaly at time  $t_0$  and  $n$  is the mean motion, or the average angular velocity, determined from the semi-major axis of the orbit as follows:

$$(3.30) \quad n = \sqrt{\frac{GM}{a^3}}$$

This solution will give the average position and velocity, but satellite orbits are elliptical with a radius constantly varying in orbit. Because the satellite's velocity depends on this varying radius, it changes as well. To resolve this problem we can define an intermediate variable  $E$ , called the *eccentric anomaly*, for elliptical orbits, which is given by

$$(3.31) \quad \cos E = \frac{e + \cos v}{1 + e \cos v}$$

where  $v$  is the true anomaly. Mean anomaly is a function of eccentric anomaly by the formula

$$(3.32) \quad M = E - e \sin E$$

For small eccentricities a good approximation of true anomaly can be obtained by the following formula (the error is of the order  $e^3$ ):

$$(3.33) \quad v \approx M + 2e \sin M + 1.25e^2 \sin 2M$$

The preceding five equations can be used to (1) find the time it takes to go from one position in an orbit to another, or (2) find the position in an orbit after a specific period of time. When solving these equations it is important to work in radians rather than degrees, where  $2\pi$  radians equals 360 degrees.

[Click here](#) for example problem #3.11

[Click here](#) for example problem #3.12

At any time in its orbit, the magnitude of a spacecraft's position vector, i.e. its distance from the primary body, and its flight-path angle can be calculated from the following equations:

$$(3.34) \quad r = \frac{a(1-e^2)}{1+e \cos v}$$

$$(3.35) \quad \phi = \arctan\left(\frac{e \sin v}{1+e \cos v}\right)$$

And the spacecraft's velocity is given by,

$$(3.36) \quad v = \frac{\sqrt{GMa(1-e^2)}}{r \cos\phi}$$

[Click here](#) for example problem #3.13

## Orbit Perturbations

The orbital elements discussed at the beginning of this section provide an excellent reference for describing orbits, however there are other forces acting on a satellite that perturb it away from the nominal orbit. These *perturbations*, or variations in the orbital elements, can be classified based on how they affect the Keplerian elements. *Secular variations* represent a linear variation in the element, *short-period variations* are periodic in the element with a period less than the orbital period, and *long-period variations* are those with a period greater than the orbital period. Because secular variations have long-term effects on orbit prediction (the orbital elements affected continue to increase or decrease), they will be discussed here for Earth-orbiting satellites. Precise orbit determination requires that the periodic variations be included as well.

### Third-Body Perturbations

The gravitational forces of the Sun and the Moon cause periodic variations in all of the orbital elements, but only the longitude of the ascending node, argument of perigee, and mean anomaly experience secular variations. These secular variations arise from a gyroscopic precession of the orbit about the ecliptic pole. The secular variation in mean anomaly is much smaller than the mean motion and has little effect on the orbit, however the secular variations in longitude of the ascending node and argument of perigee are important, especially for high-altitude orbits.

For nearly circular orbits the equations for the secular rates of change resulting from the Sun and Moon are

Longitude of the ascending node:

$$(3.37) \quad \dot{\Omega}_{\text{moon}} = -0.00338 \cos(i)/n$$

$$(3.38) \quad \dot{\Omega}_{\text{sun}} = -0.00154 \cos(i)/n$$

Argument of perigee:

$$(3.39) \quad \dot{\omega}_{\text{moon}} = 0.00169(4-5\sin^2 i)/n$$

$$(3.40) \quad \dot{\omega}_{\text{sun}} = 0.00077(4-5\sin^2 i)/n$$

where  $i$  is the orbit inclination,  $n$  is the number of orbit revolutions per day, and  $\dot{\Omega}$  and  $\dot{\omega}$  are in degrees per day. These equations are only approximate; they neglect the variation caused by the changing orientation of the orbital plane with respect to both the Moon's orbital plane and the ecliptic plane.

[Click here](#) for example problem #3.14

### Perturbations due to Non-spherical Earth

When developing the two-body equations of motion, we assumed the Earth was a spherically symmetrical, homogeneous mass. In fact, the Earth is neither homogeneous nor spherical. The most dominant features are a bulge at the equator, a slight pear shape, and flattening at the poles. For a potential function of the Earth, we can find a satellite's acceleration by taking the gradient of the potential function. The most widely used form of the geopotential function depends on latitude and geopotential coefficients,  $J_n$ , called the *zonal coefficients*.

The potential generated by the non-spherical Earth causes periodic variations in all the orbital elements. The dominant effects, however, are secular variations in longitude of the ascending node and argument of perigee because of the Earth's oblateness, represented by the  $J_2$  term in the geopotential expansion. The rates of change of  $\dot{\Omega}$  and  $\dot{\omega}$  due to  $J_2$  are

$$(3.41) \quad \begin{aligned} \dot{\Omega}_{J_2} &= -1.5nJ_2(R_E/a)^2(\cos i)(1-e^2)^{-2} \\ &\approx -2.06474 \times 10^{14} a^{-7/2}(\cos i)(1-e^2)^{-2} \end{aligned}$$

$$(3.42) \quad \begin{aligned} \dot{\omega}_{J_2} &= 0.75nJ_2(R_E/a)^2(4-5\sin^2 i)(1-e^2)^{-2} \\ &\approx 1.03237 \times 10^{14} a^{-7/2}(4-5\sin^2 i)(1-e^2)^{-2} \end{aligned}$$

where  $n$  is the mean motion in degrees/day,  $J_2$  has the value 0.00108263,  $R_E$  is the Earth's equatorial radius,  $a$  is the semi-major axis in kilometers,  $i$  is the inclination,  $e$  is the eccentricity, and  $\dot{\Omega}$  and  $\dot{\omega}$  are in degrees/day. For satellites in GEO and below, the  $J_2$  perturbations dominate; for satellites above GEO the Sun and Moon perturbations dominate.

*Molniya* orbits are designed so that the perturbations in argument of perigee are zero. This condition occurs when the term  $4-5\sin^2 i$  is equal to zero or, that is, when the inclination is either 63.4 or 116.6 degrees.

[Click here](#) for example problem #3.15

### Perturbations from Atmospheric Drag

Drag is the resistance offered by a gas or liquid to a body moving through it. A spacecraft is subjected to drag forces when

moving through a planet's atmosphere. This drag is greatest during launch and reentry, however, even a space vehicle in low Earth orbit experiences some drag as it moves through the Earth's thin upper atmosphere. In time, the action of drag on a space vehicle will cause it to spiral back into the atmosphere, eventually to disintegrate or burn up. If a space vehicle comes within 120 to 160 km of the Earth's surface, atmospheric drag will bring it down in a few days, with final disintegration occurring at an altitude of about 80 km. Above approximately 600 km, on the other hand, drag is so weak that orbits usually last more than 10 years - beyond a satellite's operational lifetime. The deterioration of a spacecraft's orbit due to drag is called *decay*.

The drag force  $F_D$  on a body acts in the opposite direction of the velocity vector and is given by the equation

$$(3.43) \quad F_D = \frac{1}{2} C_D \rho v^2 A$$

where  $C_D$  is the drag coefficient,  $\rho$  is the air density,  $v$  is the body's velocity, and  $A$  is the area of the body normal to the flow. The drag coefficient is dependent on the geometric form of the body and is generally determined by experiment. Earth orbiting satellites typically have very high drag coefficients in the range of about 2 to 4. Air density is given by the appendix [Atmosphere Properties](#).

The region above 90 km is the Earth's *thermosphere* where the absorption of extreme ultraviolet radiation from the Sun results in a very rapid increase in temperature with altitude. At approximately 200-250 km this temperature approaches a limiting value, the average value of which ranges between about 600 and 1,200 K over a typical solar cycle. Solar activity also has a significant affect on atmospheric density, with high solar activity resulting in high density. Below about 150 km the density is not strongly affected by solar activity; however, at satellite altitudes in the range of 500 to 800 km, the density variations between solar maximum and solar minimum are approximately two orders of magnitude. The large variations imply that satellites will decay more rapidly during periods of solar maxima and much more slowly during solar minima.

For circular orbits we can approximate the changes in semi-major axis, period, and velocity per revolution using the following equations:

$$(3.44) \quad \Delta a_{\text{rev}} = \frac{-2\pi C_D A \rho a^2}{m}$$

$$(3.45) \quad \Delta P_{\text{rev}} = \frac{-6\pi^2 C_D A \rho a^2}{mV}$$

$$(3.46) \quad \Delta V_{\text{rev}} = \frac{\pi C_D A \rho a V}{m}$$

where  $a$  is the semi-major axis,  $P$  is the orbit period, and  $V$ ,  $A$  and  $m$  are the satellite's velocity, area, and mass respectively. The term  $m/(C_D A)$ , called the *ballistic coefficient*, is given as a constant for most satellites. Drag effects are strongest for satellites with low ballistic coefficients, this is, light vehicles with large frontal areas.

A rough estimate of a satellite's lifetime,  $L$ , due to drag can be computed from

$$(3.47) \quad L \approx \frac{-H}{\Delta a_{\text{rev}}}$$

where  $H$  is the atmospheric density scale height. A substantially more accurate estimate (although still very approximate) can be obtained by integrating equation (3.44), taking into account the changes in atmospheric density with both altitude and solar activity.

[Click here](#) for example problem #3.16

### Perturbations from Solar Radiation

Solar radiation pressure causes periodic variations in all of the orbital elements. The magnitude of the acceleration in  $\text{m/s}^2$  arising from solar radiation pressure is

$$(3.48) \quad a_R = \frac{-4.5 \times 10^{-8} A}{m}$$

where  $A$  is the cross-sectional area of the satellite exposed to the Sun and  $m$  is the mass of the satellite in kilograms. For satellites below 800 km altitude, acceleration from atmospheric drag is greater than that from solar radiation pressure; above 800 km, acceleration from solar radiation pressure is greater.

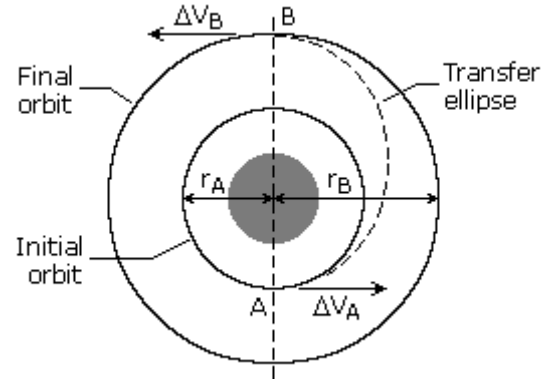
### Orbit Maneuvers

At some point during the lifetime of most space vehicles or satellites, we must change one or more of the orbital elements.

For example, we may need to transfer from an initial parking orbit to the final mission orbit, rendezvous with or intercept another spacecraft, or correct the orbital elements to adjust for the perturbations discussed in the previous section. Most frequently, we must change the orbit altitude, plane, or both. To change the orbit of a space vehicle, we have to change its velocity vector in magnitude or direction. Most propulsion systems operate for only a short time compared to the orbital period, thus we can treat the maneuver as an impulsive change in velocity while the position remains fixed. For this reason, any maneuver changing the orbit of a space vehicle must occur at a point where the old orbit intersects the new orbit. If the orbits do not intersect, we must use an intermediate orbit that intersects both. In this case, the total maneuver will require at least two propulsive burns.

### Orbit Altitude Changes

The most common type of in-plane maneuver changes the size and energy of an orbit, usually from a low-altitude parking orbit to a higher-altitude mission orbit such as a geosynchronous orbit. Because the initial and final orbits do not intersect, the maneuver requires a transfer orbit. The figure to the right represents a *Hohmann transfer orbit*. In this case, the transfer orbit's ellipse is tangential to both the initial and final orbits at the transfer orbit's perigee and apogee respectively. The orbits are tangential, so the velocity vectors are collinear, and the Hohmann transfer represents the most fuel-efficient transfer between two circular, coplanar orbits. When transferring from a smaller orbit to a larger orbit, the change in velocity is applied in the direction of motion; when transferring from a larger orbit to a smaller, the change of velocity is opposite to the direction of motion.



The total change in velocity required for the orbit transfer is the sum of the velocity changes at perigee and apogee of the transfer ellipse. Since the velocity vectors are collinear, the velocity changes are just the differences in magnitudes of the velocities in each orbit. If we know the initial and final orbits,  $r_A$  and  $r_B$ , we can calculate the total velocity change using the following equations:

$$(3.49) \quad a_{tx} = \frac{r_A + r_B}{2} \quad \text{semi-major axis of transfer ellipse}$$

$$(3.50) \quad v_{iA} = \sqrt{\frac{GM}{r_A}} \quad \text{initial velocity at point A}$$

$$(3.51) \quad v_{fB} = \sqrt{\frac{GM}{r_B}} \quad \text{final velocity at point B}$$

$$(3.52) \quad v_{txA} = \sqrt{GM \left( \frac{2}{r_A} - \frac{1}{a_{tx}} \right)} \quad \text{velocity on transfer orbit at initial orbit (point A)}$$

$$(3.53) \quad v_{txB} = \sqrt{GM \left( \frac{2}{r_B} - \frac{1}{a_{tx}} \right)} \quad \text{velocity on transfer orbit at final orbit (point B)}$$

$$(3.54) \quad \Delta V_A = v_{txA} - v_{iA} \quad \text{initial velocity change}$$

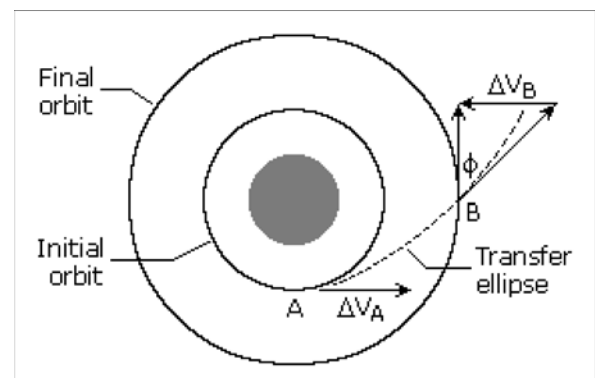
$$(3.55) \quad \Delta V_B = v_{fB} - v_{txB} \quad \text{final velocity change}$$

$$(3.56) \quad \Delta V_T = \Delta V_A + \Delta V_B \quad \text{total velocity change}$$

Note that equations (3.50) and (3.51) are the same as equation (3.6), and equations (3.52) and (3.53) are variations of equations (3.16) and (3.17) respectively.

[Click here](#) for example problem #3.17

Ordinarily we want to transfer a space vehicle using the smallest amount of energy, which usually leads to using a Hohmann transfer orbit. However, sometimes we may need to transfer a satellite between orbits in less time than that required to complete the Hohmann transfer. The figure to the right shows a faster transfer called the *One-Tangent Burn*. In this instance the transfer orbit is tangential to the initial orbit. It intersects the final orbit at an angle equal to the flight path angle of the transfer orbit at the point of intersection. An infinite number of transfer orbits are tangential to the initial orbit and intersect the final orbit at some angle. Thus, we may choose the transfer orbit by specifying the size of the transfer orbit, the angular change of the transfer, or the time required to complete the transfer. We can then define the transfer orbit and calculate the required



velocities.

For example, we may specify the size of the transfer orbit, choosing any semi-major axis that is greater than the semi-major axis of the Hohmann transfer ellipse. Once we know the semi-major axis of the ellipse ( $a_{tx}$ ), we can calculate the eccentricity, angular distance traveled in the transfer, the velocity change required for the transfer, and the time required to complete the transfer. We do this using equations (3.50) through (3.54) and (3.56) above, and the following equations:

$$(3.57) \quad e = 1 - \frac{r_A}{a_{tx}} \quad \text{eccentricity of transfer ellipse}$$

$$(3.58) \quad \nu = \arccos \left[ \frac{\left( \frac{a_{tx}(1-e^2)}{r_B} - 1 \right)}{e} \right] \quad \text{true anomaly at second burn}$$

$$(3.59) \quad \phi = \arctan \left( \frac{e \sin \nu}{1 + e \cos \nu} \right) \quad \text{flight-path angle at second burn}$$

$$(3.60) \quad \Delta V_B = \sqrt{V_{txB}^2 + V_{fB}^2 - 2V_{txB}V_{fB} \cos \phi} \quad \text{final velocity change}$$

$$(3.61) \quad E = \arctan \left( \frac{\sqrt{1-e^2} \sin \nu}{e + \cos \nu} \right) \quad \text{eccentric anomaly}$$

$$(3.62) \quad \text{TOF} = (E - e \sin E) \sqrt{\frac{a^3}{GM}} \quad \text{time-of-flight, E in radians}$$

[Click here](#) for example problem #3.18

Another option for changing the size of an orbit is to use electric propulsion to produce a constant low-thrust burn, which results in a *spiral transfer*. We can approximate the velocity change for this type of orbit transfer by

$$(3.63) \quad \Delta V = V_2 - V_1$$

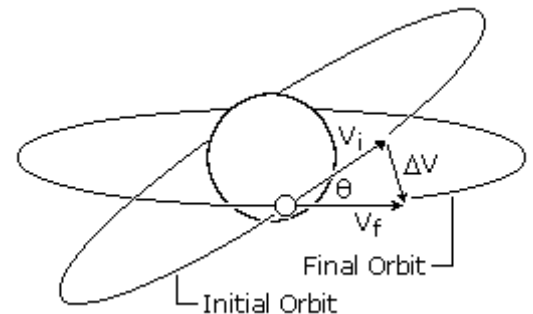
where the velocities are the circular velocities of the two orbits.

### Orbit Plane Changes

To change the orientation of a satellite's orbital plane, typically the inclination, we must change the direction of the velocity vector. This maneuver requires a component of  $\Delta V$  to be perpendicular to the orbital plane and, therefore, perpendicular to the initial velocity vector. If the size of the orbit remains constant, the maneuver is called a *simple plane change*. We can find the required change in velocity by using the law of cosines. For the case in which  $V_f$  is equal to  $V_i$ , this expression reduces to

$$(3.64) \quad \Delta V = 2V_i \sin \left( \frac{\theta}{2} \right)$$

where  $V_i$  is the velocity before and after the burn, and  $\theta$  is the angle change required.



[Click here](#) for example problem #3.19

From equation (3.64) we see that if the angular change is equal to 60 degrees, the required change in velocity is equal to the current velocity. Plane changes are very expensive in terms of the required change in velocity and resulting propellant consumption. To minimize this, we should change the plane at a point where the velocity of the satellite is a minimum: at apogee for an elliptical orbit. In some cases, it may even be cheaper to boost the satellite into a higher orbit, change the orbit plane at apogee, and return the satellite to its original orbit.

Typically, orbital transfers require changes in both the size and the plane of the orbit, such as transferring from an inclined parking orbit at low altitude to a zero-inclination orbit at geosynchronous altitude. We can do this transfer in two steps: a Hohmann transfer to change the size of the orbit and a simple plane change to make the orbit equatorial. A more efficient method (less total change in velocity) would be to combine the plane change with the tangential burn at apogee of the transfer orbit. As we must change both the magnitude and direction of the velocity vector, we can find the required change in velocity using the law of cosines,

$$(3.65) \quad \Delta V = \sqrt{V_i^2 + V_f^2 - 2V_iV_f \cos \theta}$$

where  $V_i$  is the initial velocity,  $V_f$  is the final velocity, and  $\theta$  is the angle change required. Note that equation (3.65) is in the same form as equation (3.60).

[Click here](#) for example problem #3.20

As can be seen from equation (3.65), a small plane change can be combined with an altitude change for almost no cost in  $\Delta V$  or propellant. Consequently, in practice, geosynchronous transfer is done with a small plane change at perigee and most of the plane change at apogee.

Another option is to complete the maneuver using three burns. The first burn is a coplanar maneuver placing the satellite into a transfer orbit with an apogee much higher than the final orbit. When the satellite reaches apogee of the transfer orbit, a combined plane change maneuver is done. This places the satellite in a second transfer orbit that is coplanar with the final orbit and has a perigee altitude equal to the altitude of the final orbit. Finally, when the satellite reaches perigee of the second transfer orbit, another coplanar maneuver places the satellite into the final orbit. This three-burn maneuver may save propellant, but the propellant savings comes at the expense of the total time required to complete the maneuver.

In addition to changing the inclination, a plane change can also change the longitude of the orbit's ascending node,  $\Omega$ . If the inclination and  $\Omega$  are known for both the initial and final orbits, the angle of the plane change can be found from the following equation:

$$(3.66) \quad \cos \theta = \cos i_i \cos i_f + \sin i_i \sin i_f (\cos \Omega_i \cos \Omega_f + \sin \Omega_i \sin \Omega_f)$$

where  $i_i$  and  $\Omega_i$  are the inclination and longitude of ascending node of the initial orbit, and  $i_f$  and  $\Omega_f$  are the inclination and longitude of ascending node of the final orbit.

[Click here](#) for example problem #3.21

## Orbit Rendezvous

Orbital transfer becomes more complicated when the object is to rendezvous with or intercept another object in space: both the interceptor and the target must arrive at the rendezvous point at the same time. This precision demands a phasing orbit to accomplish the maneuver. A *phasing orbit* is any orbit that results in the interceptor achieving the desired geometry relative to the target to initiate a Hohmann transfer. If the initial and final orbits are circular, coplanar, and of different sizes, then the phasing orbit is simply the initial interceptor orbit. The interceptor remains in the initial orbit until the relative motion between the interceptor and target results in the desired geometry. At that point, we would inject the interceptor into a Hohmann transfer orbit.

## Launch Windows

Similar to the rendezvous problem is the launch-window problem, or determining the appropriate time to launch from the surface of the Earth into the desired orbital plane. Because the orbital plane is fixed in inertial space, the launch window is the time when the launch site on the surface of the Earth rotates through the orbital plane. The time of the launch depends on the launch site's latitude and longitude and the satellite orbit's inclination and longitude of ascending node.

## Orbit Maintenance

Once in their mission orbits, many satellites need no additional orbit adjustment. On the other hand, mission requirements may demand that we maneuver the satellite to correct the orbital elements when perturbing forces have changed them. Two particular cases of note are satellites with repeating ground tracks and geostationary satellites.

After the mission of a satellite is complete, several options exist, depending on the orbit. We may allow low-altitude orbits to decay and reenter the atmosphere or use a velocity change to speed up the process. We may also boost satellites at all altitudes into benign orbits to reduce the probability of collision with active payloads, especially at synchronous altitudes.

## $\Delta V$ Budget

To an orbit designer, a space mission is a series of different orbits. For example, a satellite might be released in a low-Earth parking orbit, transferred to some mission orbit, go through a series of resphasings or alternate mission orbits, and then move to some final orbit at the end of its useful life. Each of these orbit changes requires energy. The  $\Delta V$  budget is traditionally used to account for this energy. It sums all the velocity changes required throughout the space mission life. In a broad sense the  $\Delta V$  budget represents the cost for each mission orbit scenario.

## Escape Velocity

We know that if we throw a ball up from the surface of the Earth, it will rise for a while and then return. If we give it a larger initial velocity, it will rise higher and then return. There is a velocity, called the *escape velocity*,  $V_{esc}$ , such that if the ball is launched with an initial velocity greater than  $V_{esc}$ , it will rise and never return. We must give the particle enough kinetic energy to overcome all of the negative gravitational potential energy. Thus, if  $m$  is the mass of the ball,  $M$  is the mass of the Earth, and  $R$  is the radius of the Earth, the potential energy is  $-GmM/R$ . The kinetic energy of the ball, when it is launched, is  $mv^2/2$ . We thus have

$$\frac{GmM}{R} = \frac{mV_{\text{esc}}^2}{2}, \text{ or}$$

$$(3.67) \quad V_{\text{esc}} = \sqrt{\frac{2GM}{R}}$$

which is independent of the mass of the ball.

For a spacecraft launched to escape velocity from a parking orbit,  $R$  is the radius of the orbit.

[Click here](#) for example problem #3.22

---

Compiled and edited by Robert A. Braeunig, 1997, 2005, 2007.

[Acknowledgements](#)

Home Page	▼	Go
Back	Home	